

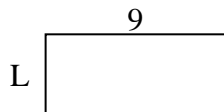


Determine the value of 'L'.

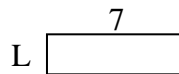
1) Area = $8u^2$



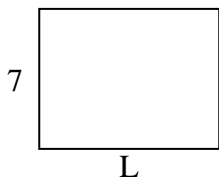
2) Area = $36u^2$



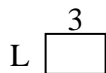
3) Area = $14u^2$



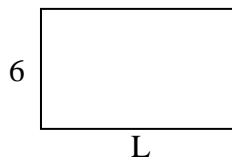
4) Area = $63u^2$



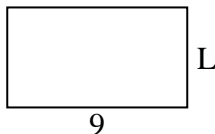
5) Area = $6u^2$



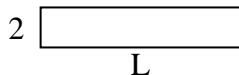
6) Area = $60u^2$



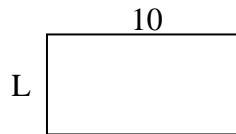
7) Area = $45u^2$



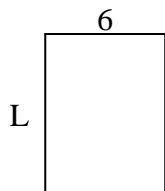
8) Area = $20u^2$



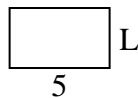
9) Area = $50u^2$



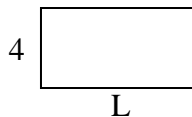
10) Area = $48u^2$



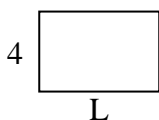
11) Area = $15u^2$



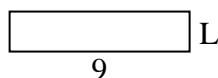
12) Area = $32u^2$



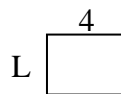
13) Area = $24u^2$



14) Area = $18u^2$



15) Area = $12u^2$



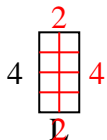
Answers

1. _____
2. _____
3. _____
4. _____
5. _____
6. _____
7. _____
8. _____
9. _____
10. _____
11. _____
12. _____
13. _____
14. _____
15. _____

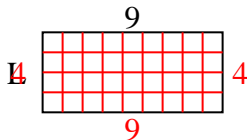


Determine the value of 'L'.

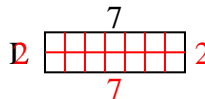
1) Area = $8u^2$



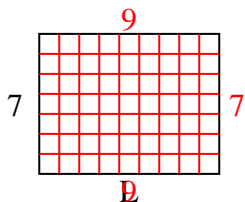
2) Area = $36u^2$



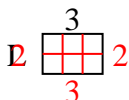
3) Area = $14u^2$



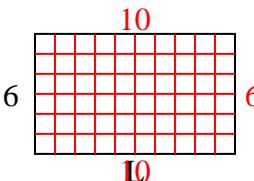
4) Area = $63u^2$



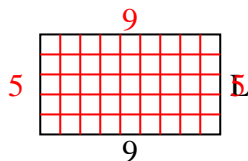
5) Area = $6u^2$



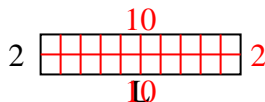
6) Area = $60u^2$



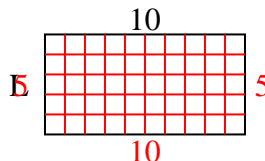
7) Area = $45u^2$



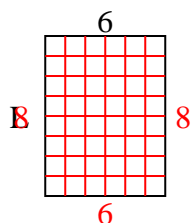
8) Area = $20u^2$



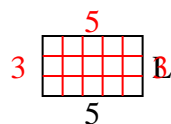
9) Area = $50u^2$



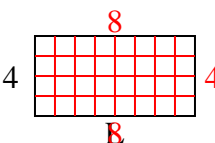
10) Area = $48u^2$



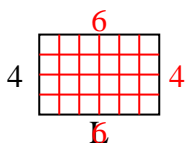
11) Area = $15u^2$



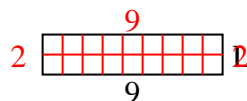
12) Area = $32u^2$



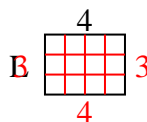
13) Area = $24u^2$



14) Area = $18u^2$



15) Area = $12u^2$



Answers

1. 2

2. 4

3. 2

4. 9

5. 2

6. 10

7. 5

8. 10

9. 5

10. 8

11. 3

12. 8

13. 6

14. 2

15. 3